



THE ADVENT SCHOOL
WINTER BREAK HOMEWORK ASSIGNMENTS
SESSION (2024-25)

NAME- _____

CLASS – II - _____



There's nothing better
Than curling up with
a good book and sitting
In front of the fire on
Winter evenings.

Healthy Food

Read the passage below and answer the following questions.

Healthy foods are important for our bodies to grow strong and stay healthy. Fruits and vegetables are some of the healthiest foods we can eat. They come in many different colors and flavors. Apples, oranges, carrots, and broccoli are just a few examples of these nutritious foods. They are packed with vitamins and minerals that help us stay energized and keep our immune system strong. Eating healthy foods also helps us have strong bones and teeth. So, next time you're hungry, reach for a delicious and nutritious fruit or vegetable!

1) Why are healthy foods important?

2) What do fruits and vegetables provide us with?

3) How do healthy foods help our bodies?

4) Name some examples of healthy foods.

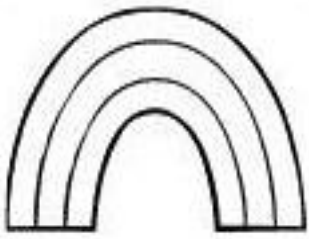


VOCABULARY WORKSHEET

Directions: Read each sentence below. Fill-in the blank with a vocabulary word from the word box.


asleep afternoon scare telephone instrument ability audience
band exciting marry practice opportunity support available
influence

1. In the _____ we will go home from school
2. I fell _____ at night
3. The _____ played a lot of good songs
4. The game was very _____ at the end
5. I used my _____ to call my parents
6. My older brother wanted to _____ me
7. I watched my older sister _____ her life-long sweetheart
8. We had basketball _____ after school
9. What _____ do you play?
10. She had to _____ her mom to let her go
11. That boy has a great _____ to learn
12. Do you think i have the _____ to succeed?
13. I hope that all your teachers _____ you
14. Do you know when the movie will be _____?
15. The play was performed in front of the _____?



FOLLOWING DIRECTIONS

- Color the rainbow blue, yellow and purple.
- Draw 5 raindrops under the umbrella.
- Color the sprouts green.
- Underline the broom.
- Color the bird blue and the egg yellow.
- Put a box around the jacket.
- Color the tulip pink and the leaves green.
- Circle the pinwheel and color it blue.
- Draw a cloud on the watering can
- Color 1 boot purple and 1 boot green.
- Underline the rainbow.



Fill in the blanks by using " a " or " an " .

- | | | | |
|--------------------|--------------------|------------------|--------------------|
| 1. _____ onion | 11. _____ oar | 21. _____ jacket | 31. _____ axe |
| 2. _____ rabbit | 12. _____ elephant | 22. _____ apron | 32. _____ umbrella |
| 3. _____ sandwich | 13. _____ baby | 23. _____ insect | 33. _____ ostrich |
| 4. _____ dress | 14. _____ arm | 24. _____ cookie | 34. _____ van |
| 5. _____ anchor | 15. _____ octopus | 25. _____ eagle | 35. _____ student |
| 6. _____ jump rope | 16. _____ leg | 26. _____ apple | 36. _____ envelope |
| 7. _____ glass | 17. _____ duck | 27. _____ doll | 37. _____ sister |
| 8. _____ egg | 18. _____ iron | 28. _____ orange | 38. _____ airplane |
| 9. _____ igloo | 19. _____ ant | 29. _____ school | 39. _____ owl |
| 10. _____ father | 20. _____ train | 30. _____ girl | 40. _____ ring |

He, She, It, They

Look at the picture. Circle the correct pronoun for each.



it she they



he she they



he she they



it she he



he it they



he she they

am is are



1. He ____ a teacher.

2. I ____ an engineer.



3. They ____ French.

4. I ____ happy.



5. He ____ from Madrid.

6. The girl ____ my sister.



7. Mary ____ sick.

8. She ____ a doctor.



9. It ____ an orange.

10. They ____ tired.



11. We ____ best friends.

12. He ____ sad.



Opposite Words

Read and match the opposite words.

day

in

boy

short

inside

soft

happy

dry

adult

fast

tall

hard

wet

night

slow

child

out

outside

girl

sad

HINDI

क्लोज़ पैसेज(Cloze Passage)

दिन	चूहा	पीठ	गुस्सा
शेर	पंजे	भागा	खतरनाक
गुफा	कुचलने	नन्हा	जान

शेर और चूहा



गर्मी का _____ था और एक _____ अपनी _____ में झपकी ले रहा था। अचानक एक _____ गलती से उसकी _____ पर चढ़ गया और शेर जैसे _____ जानवर को जगा दिया। शेर को बहुत _____ आया। शेर अपने _____ के नीचे चूहे को _____ ही वाला था कि _____ चूहा वंहा से अपनी _____ बचाकर _____।

लिंग बदलो

नीचे लिखे रेखांकित शब्दों के लिंग बदलकर वाक्यों को दोबारा लिखिए ।
Change the gender of underlined word and rewrite the sentence.

उदाहरण - अध्यापक कक्षा में पढ़ा रहे हैं ।

अध्यापिका कक्षा में पढ़ा रही हैं ।

1. माली पौधों की देखभाल करता है ।

.....

2. मेरी माताजी मुझे बहुत प्यार करती हैं ।

.....

3. भिखारिन के फटे कपड़े देखकर सेठानी को दया आ गई ।

.....

4. गायक के मधुर संगीत ने युवकों को आनंदित कर दिया ।

.....

5. सेवक की ईमानदारी देखकर मालिक ने उसे पुरस्कार दिया ।

.....

6. गायिका ने मधुर संगीत सुनाया ।

.....

नीचे दिए गए अपठित पद्यांश को पढ़कर दिए गए प्रश्नों के सही उत्तर चुनकर लिखिए।

समय का सबसे कहना है, जीवन चलते रहना है,
इसको मत बर्बाद करो ,सदा काम की बात करो।
फूल सदा मुस्काते है , हमको यह समझाते है ,
जीवन हँसते रहना है , दुःख -सुख भी सहना है।
कर्म ही जिसकी प्रीत है ,सत्य से जिसको प्रीत है,
अंत में उसकी जीत है, समय भी उसका मीत है।

1. समय का सबसे क्या कहना है ?

() आराम करो () इसको मत बर्बाद करो () बात करो

2. दुःख भी सहना है - यह कौन सिखलाता है ?

() फूल () मस्त हवाएँ () समय

3. समय किसका मित्र है ?

() जो कर्म करता रहता है () जिसे सत्य से प्रेम है () जो आलसी है

4. किसे बर्बाद नहीं करना चाहिए ?

() फूल () कर्म () समय

विलोम शब्द

निम्नलिखित शब्दों के विलोम शब्द लिखिए

आज - _____

अल्प - _____

लाल - _____

उच्च - _____

दिन - _____

दया - _____

ऊपर - _____

पुण्य - _____

रोना - _____

अनपढ़ - _____

स्त्री - _____

मीठा - _____

लड़का - _____

नरम - _____

बेटा - _____

पाचक - _____

सच - _____

शिक्षित - _____

काला - _____

अमीर - _____

कच्चा - _____

सुखी - _____

अंदर - _____

अंत - _____

आग - _____

अनेक - _____

देना - _____


अनुराग - _____

जागना - _____

उजाला - _____

MATHS

+ Add the followings-



$$\begin{array}{r} \\ 27 \\ + 67 \\ \hline \end{array}$$

$$\begin{array}{r} \\ 13 \\ + 57 \\ \hline \end{array}$$

$$\begin{array}{r} \\ 224 \\ + 97 \\ \hline \end{array}$$

$$\begin{array}{r} \\ 439 \\ + 274 \\ \hline \end{array}$$

$$\begin{array}{r} \\ 68 \\ + 328 \\ \hline \end{array}$$

$$\begin{array}{r} \\ 586 \\ + 47 \\ \hline \end{array}$$

$$\begin{array}{r} \\ 438 \\ + 290 \\ \hline \end{array}$$



$$\begin{array}{r} \\ 335 \\ + 187 \\ \hline \end{array}$$

$$\begin{array}{r} \\ 453 \\ + 368 \\ \hline \end{array}$$

$$\begin{array}{r} \\ 645 \\ + 187 \\ \hline \end{array}$$

Repeating, Growing and Shrinking Patterns

Continue the repeating patterns below.



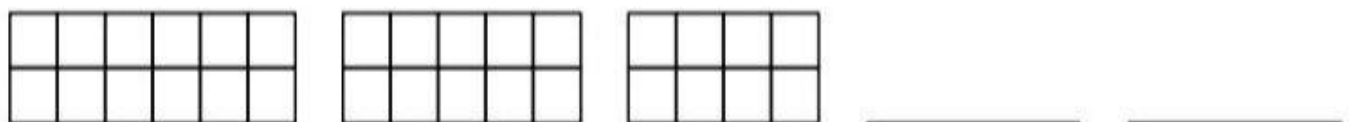
Continue the growing patterns below.



30, 35, 40, 45, 50, _____, _____, _____, _____, _____

40, 42, 44, 46, 48, _____, _____, _____, _____, _____

Continue the shrinking patterns below.








100, 90, 80, 70, 60, _____, _____, _____, _____, _____




50, 47, 44, 41, 38, _____, _____, _____, _____, _____




Write the following in expanded form and name them.



182 = 100 + 80 + 2 = One hundred eighty two.




212 =  +  +  = _____




687 =  +  +  = _____


374 =  +  +  = _____




465 =  +  +  = _____




893 =  +  +  = _____




749 =  +  +  = _____

524 =  +  +  = _____

964 =  +  +  = _____


999 =  +  +  = _____

450 =  +  +  = _____

309 =  +  +  = _____



Solve the followings-



$40 \div 5 = \square$	$6 \div 3 = \square$
$21 \div 7 = \square$	$27 \div 9 = \square$
$12 \div 3 = \square$	$12 \div 6 = \square$
$15 \div 5 = \square$	$18 \div 3 = \square$
$16 \div 8 = \square$	$10 \div 10 = \square$
$20 \div 5 = \square$	$18 \div 6 = \square$
$12 \div 4 = \square$	$36 \div 9 = \square$
$3 \div 1 = \square$	$9 \div 3 = \square$
$6 \div 2 = \square$	$4 \div 1 = \square$
$14 \div 7 = \square$	$10 \div 2 = \square$

EVS

I. Write the names of the following food items under the correct part of the plant:

Mango	Corn	Watermelon	Carrot	Sugarcane	Spinach
Cauliflower	Peas	Broccoli	Mint	Potato	Beetroot

ROOT

FLOWER

STEM

FRUITS

LEAVES

SEEDS

II. Choose the correct word and write it in the box.

- a) Climbers cannot stand straight because they have **strong/ weak** stems. _____
- b) Fruits and flowers grow on the **roots/ branches**. _____
- c) Roots of a plant grow under the **ground/ fruit**. _____
- d) The part of the plant that has seeds in it is called a **flower/ fruit**. _____

III. Write true or false.

- a) Plants give us fruits and soil. _____
- b) Rose and Jasmine are creepers. _____
- a) Seeds are used for growing new plants. _____
- b) The thick stem of a tree is called the trunk. _____

Herbivore, Carnivore, or Omnivore?

Identify animals that are herbivores, carnivores, and omnivores.

Write what type of consumer each animal is.

Herbivore: an animal that eats only plants

Carnivore: an animal that eats only other animals

Omnivore: an animal that eats both plants and animals

1. lion



2. squirrel



3. deer



4. coyote



5. cow



6. brown bear



7. rabbit



8. raccoon



9. giraffe



Match



River

Mountains

Forest

Volcano

Waterfall

Beach

Fruit and vegetables:



banana

potato

tomato

peach

onion

avocado

cucumber

pear

carrot

cherry

orange

pepper



PLACES IN THE CITY



BEACH



SCHOOL



HOTEL



HOSPITAL



BUS STOP



RESTAURANT



SUPERMARKET



MUSEUM



CINEMA

X	A	X	F	O	B	A	N	K	G	R
Y	J	J	C	B	E	A	C	H	K	S
T	V	U	J	B	U	S	S	T	O	P
J	M	I	Q	P	S	C	H	O	O	L
X	O	F	K	Z	X	C	F	H	P	R
L	R	E	S	T	A	U	R	A	N	T
Z	G	T	M	O	N	U	M	E	N	T
H	B	X	E	C	Z	Y	C	Z	P	Q
Y	F	R	E	G	Q	Z	B	H	W	R
E	R	S	Z	W	C	I	N	E	M	A
S	T	A	D	I	U	M	S	B	S	L
H	Z	Q	L	M	U	S	E	U	M	X
G	X	X	H	O	T	E	L	T	L	V
N	F	A	H	O	S	P	I	T	A	L
M	V	C	P	A	R	K	Y	M	H	E
S	U	P	E	R	M	A	R	K	E	T



PARK



STADIUM



MONUMENT



BANK

